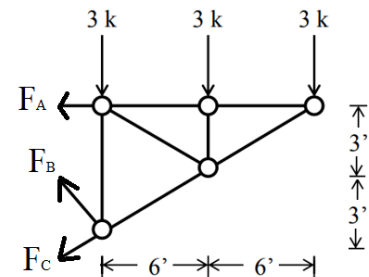
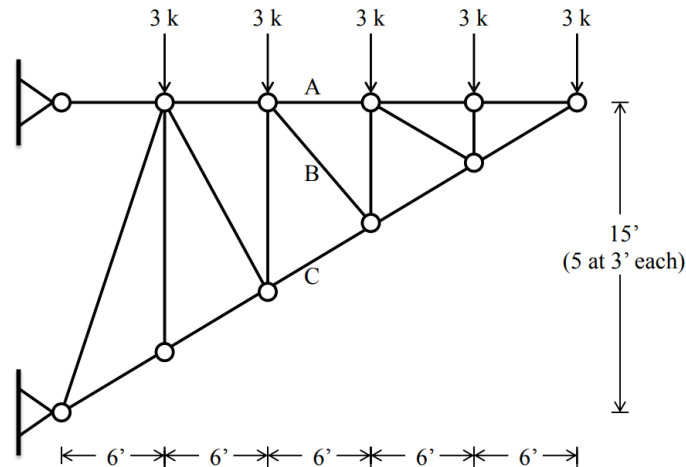


Homework 2

(Due: Friday, February 24, 2023 at 11:59pm)

Question 1: 5 points

Using method of sections, determine the forces in members A, B, and C. State if the members are in tension or compression.



$$\sum F_x = 0 \rightarrow F_A + \frac{6}{\sqrt{72}}F_B + \frac{6}{\sqrt{45}}F_C = 0$$

$$\sum F_y = 0 \rightarrow \frac{6}{\sqrt{72}}F_B - \frac{3}{\sqrt{45}}F_C - 9 = 0$$

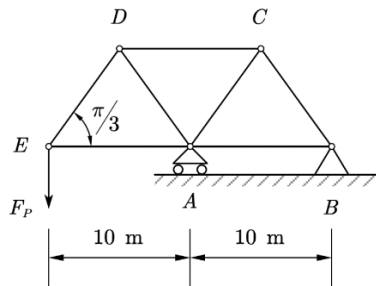
$$\sum M_{BC} = 0 \rightarrow F_A(6) - 3(6) - 3(12) = 0$$

$$F_A = 9 \text{ kips}, F_B = 4.24 \text{ kips}, F_C = -13.42 \text{ kips}$$

Members A and B are in tension, and member C is in compression.

Question 2: 10 points

If the maximum force that any member can support is 17 kips in tension and 12 kips in compression, determine the maximum force F_p can be applied on the following structure (all the angles are $\pi/3$).

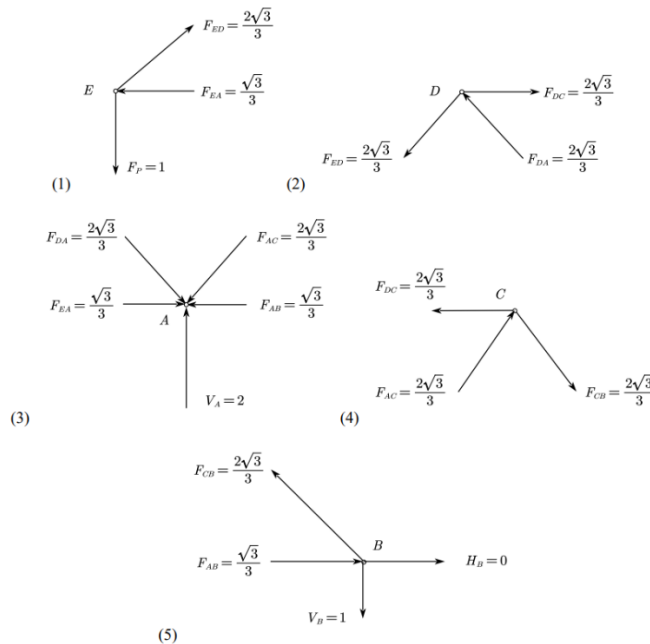


Use method of superposition for this linear elastic structure and assume $F_p = 1 \text{ kips}$, the vertical reaction forces at A and B are:

$$\sum M_A = 0 \rightarrow V_B = 1 \text{ kips (downward)}$$

$$\sum F_y = 0 \rightarrow V_A = 2 \text{ kips (upward)}$$

Use the method of joint to calculate the force in each member starting from joint E:



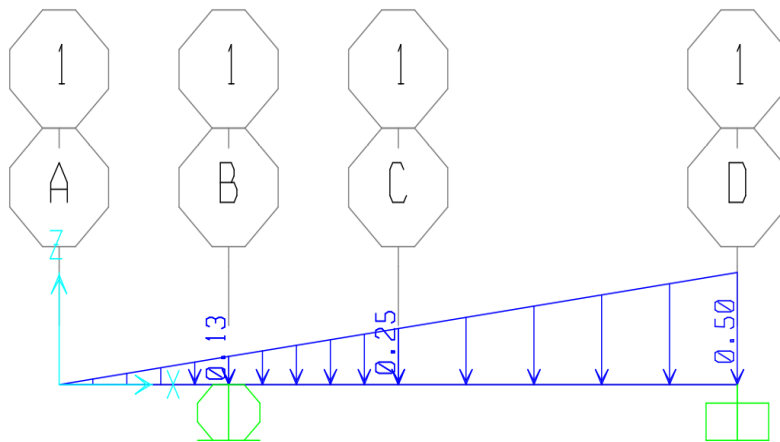
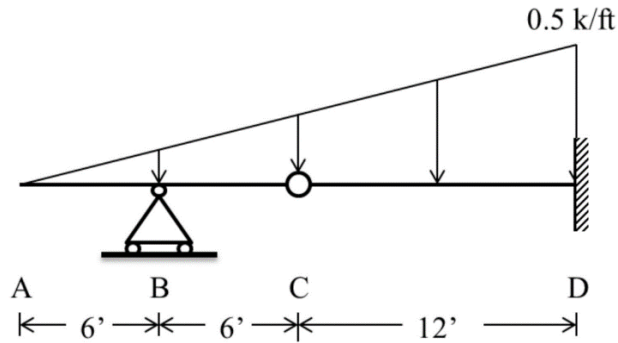
Hence, the maximum tension and compression forces are the same and have the value of $\frac{2\sqrt{3}}{3}$

Therefore, the compression controls, and the maximum possible value for F_p is calculated as follows:

$$F_p = \frac{12}{\frac{2\sqrt{3}}{3}} * 1 = \frac{18}{\sqrt{3}} = 6\sqrt{3} = 10.4 \text{ kips}$$

Question 3: 15 points

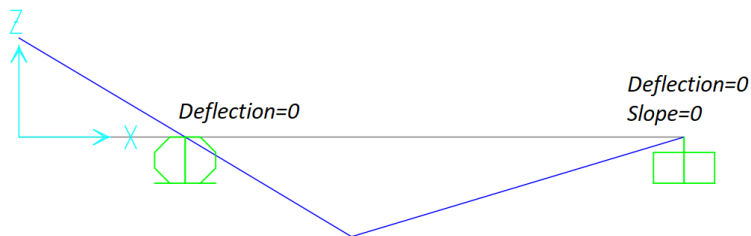
Determine the shear and moment throughout the beam. Draw the shear and moment diagrams for the beam. Draw the deflected shape of the beam.



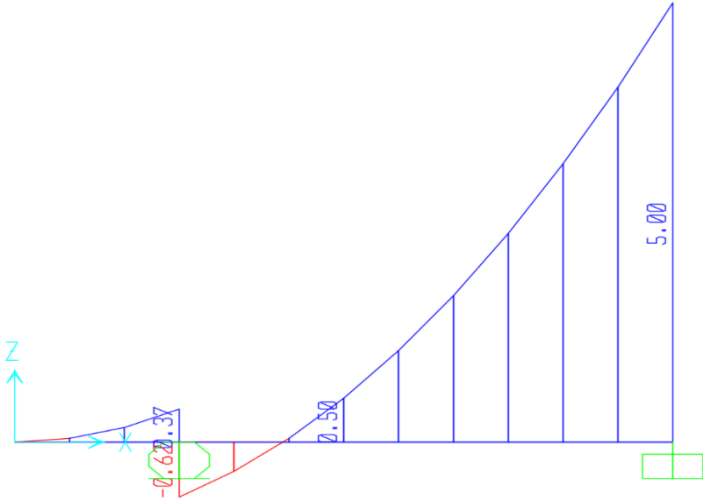
Reactions: $R_B = 1$ kips, $R_D = 5$ kips



Deflected Shape:



Shear Diagram: $V_A = 0$, $V_{B,left} = 0.375$ kips, $V_{B,right} = -0.625$ kips, $V_C = 0.5$ kips, $V_D = 5$ kips



Moment Diagram: $M_A = 0$, $M_B = -0.75$ kips.ft, $M_C = 0$, $M_D = -30$ kips.ft

