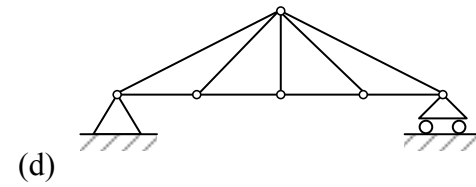
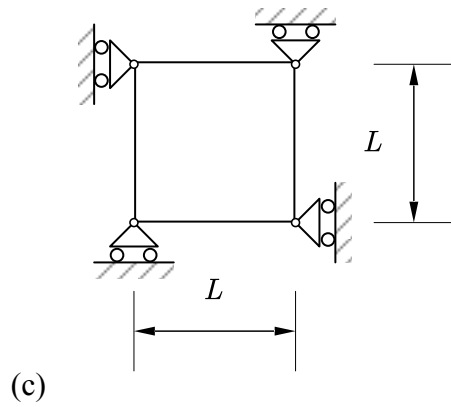
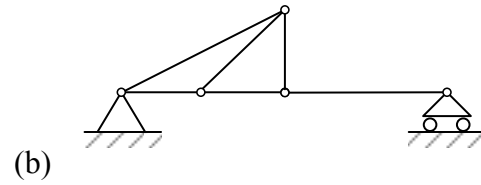
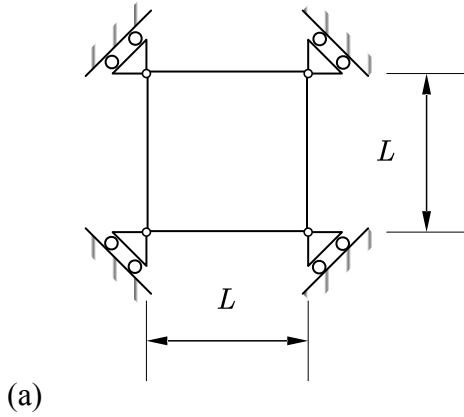


### Homework #1

**Problem 1:** Classify each of the structures as statically determinate, statically indeterminate, stable, or unstable. If indeterminate, specify the degree of indeterminacy.



**Problem 2:** Solve for the reactions for the following structures. Shear force and bending moment diagram are also required to present.

